



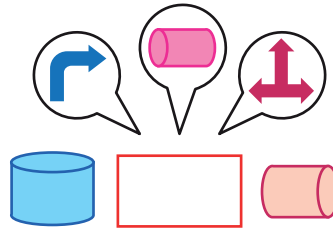


FICHAS PARA PRIMARIA

PRIMERO ALGEBRA



Encuentra el Número, con Adición Hasta el 20

Mira, observa y elige el gráfico que le corresponde a cada rectángulo central.



Actividades

Ahora; mira, observa, calcula y elige el número que le corresponde a cada rectángulo.

1

$$7 + \boxed{} = 12$$

Options: 3, 4, 5

Resolución:

$$7 + \boxed{5} = 12$$

- ❖ $7 + 3 = 10$
- ❖ $7 + 4 = 11$
- ❖ $7 + 5 = 12$

Respuesta: 5

2

$$\boxed{} + 3 = 17$$

Options: 12, 14, 16

3


$$12 + \boxed{} = 19$$

Options: 7, 8, 9

4

$$\boxed{} + 6 = 19$$

Options: 12, 13, 14



Exigimos más

5

$$9 + \boxed{} = 15$$

Options: 4, 5, 6

Resolución

$$9 + \boxed{6} = 15$$

Options: 4, 5, 6

- ❖ $9 + 4 = 13$
- ❖ $9 + 5 = 14$
- ❖ $9 + 6 = 15$

Respuesta: 6

6

$$11 + \boxed{} = 18$$

Options: 7, 8, 9



Demuestro mis habilidades

9

$$7 + \boxed{} = 19$$

Options: 11, 12, 13

10

$$\boxed{} + 12 = 16$$

Options: 4, 6, 8

7

$$7 + \boxed{} = 15$$

Options: 7, 8, 9

8

$$\boxed{} + 3 = 19$$

Options: 14, 15, 16

Vamos tú puedes...!!



11

$$\boxed{} + 4 = 19$$

Options: 13, 15, 17

12

$$\boxed{} + 7 = 18$$

Options: 11, 13, 14